

Datum:

Richtig gelöst: Aufgaben

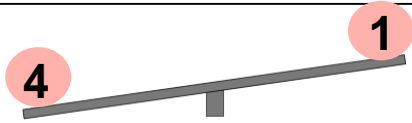
4 <input checked="" type="checkbox"/> > 1	2 <input checked="" type="checkbox"/> < 6
6 <input type="checkbox"/> 4	2 <input type="checkbox"/> 8
5 <input type="checkbox"/> 10	7 <input type="checkbox"/> 3
0 <input type="checkbox"/> 4	2 <input type="checkbox"/> 5
10 <input type="checkbox"/> 2	5 <input type="checkbox"/> 9

Richtig gelöst: Aufgaben

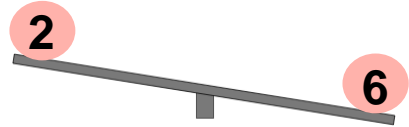
4 <input type="checkbox"/> 10	32 <input type="checkbox"/> 23
9 <input type="checkbox"/> 14	26 <input type="checkbox"/> 19
12 <input type="checkbox"/> 10	31 <input type="checkbox"/> 19
3 <input type="checkbox"/> 4	18 <input type="checkbox"/> 21
12 <input type="checkbox"/> 22	47 <input type="checkbox"/> 71

Datum:

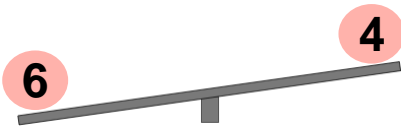
Richtig gelöst: Aufgaben



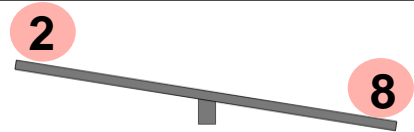
$$4 - \square = 1$$
$$4 = 1 + \square$$



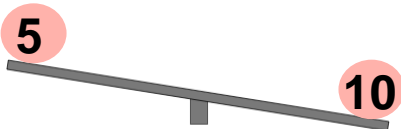
$$2 + \square = 6$$
$$2 = 6 - \square$$



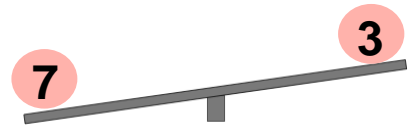
$$6 - \square = 4$$
$$6 = 4 + \square$$



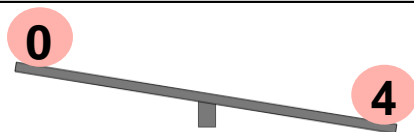
$$2 + \square = 8$$
$$2 = 8 - \square$$



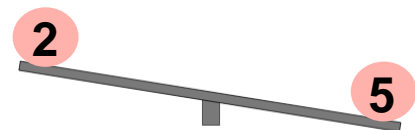
$$5 + \square = 10$$
$$5 = 10 - \square$$



$$7 - \square = 3$$
$$7 = 3 + \square$$



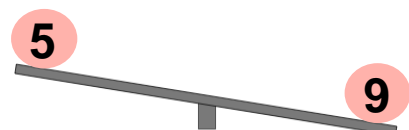
$$0 + \square = 4$$
$$0 = 4 - \square$$



$$2 + \square = 5$$
$$2 = 5 - \square$$



$$10 - \square = 2$$
$$10 = 2 + \square$$



$$5 + \square = 9$$
$$5 = 9 - \square$$

Datum:

Richtig gelöst: Aufgaben

4

1

$$\begin{aligned} 4 - \square &= 1 \\ 4 &= 1 + \square \end{aligned}$$

2

6

$$\begin{aligned} 2 + \square &= 6 \\ 2 &= 6 - \square \end{aligned}$$

6

4

$$\begin{aligned} 6 - \square &= 4 \\ 6 &= 4 + \square \end{aligned}$$

2

8

$$\begin{aligned} 2 + \square &= 8 \\ 2 &= 8 - \square \end{aligned}$$

5

10

$$\begin{aligned} 5 + \square &= 10 \\ 5 &= 10 - \square \end{aligned}$$

7

3

$$\begin{aligned} 7 - \square &= 3 \\ 7 &= 3 + \square \end{aligned}$$

0

4

$$\begin{aligned} 0 + \square &= 4 \\ 0 &= 4 - \square \end{aligned}$$

2

5

$$\begin{aligned} 2 + \square &= 5 \\ 2 &= 5 - \square \end{aligned}$$

10

2

$$\begin{aligned} 10 - \square &= 2 \\ 10 &= 2 + \square \end{aligned}$$

5

9

$$\begin{aligned} 5 + \square &= 9 \\ 5 &= 9 - \square \end{aligned}$$